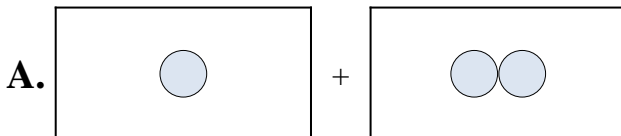




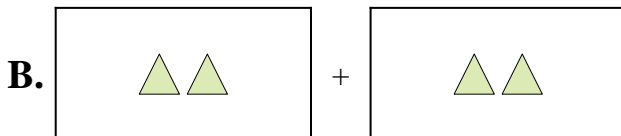
Match each addition equation to its visual equivalent.

Answers

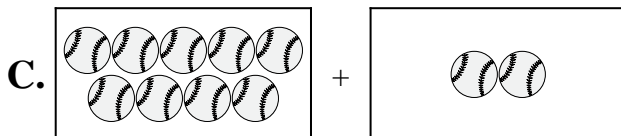
1) $9 + 2$



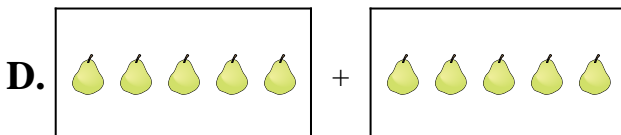
2) $2 + 6$



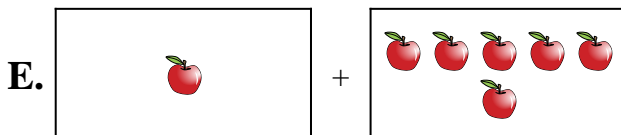
3) $1 + 2$



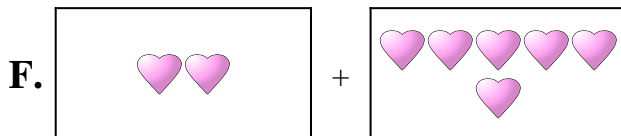
4) $1 + 6$



5) $3 + 4$




6) $10 + 10$



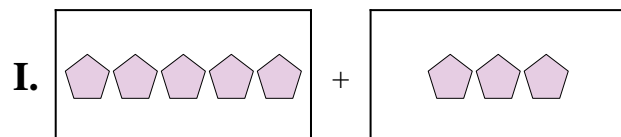
7) $5 + 3$



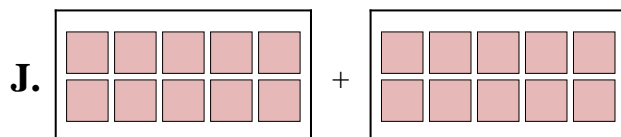
8) $7 + 10$



9) $2 + 2$



10) $5 + 5$

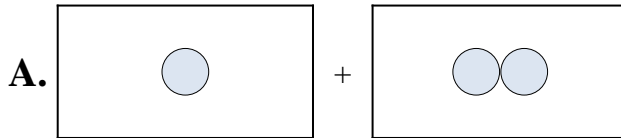


1. _____
2. _____
3. _____
4. _____
5. _____
6. _____
7. _____
8. _____
9. _____
10. _____

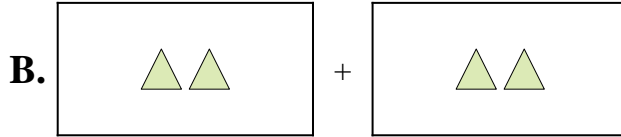


Match each addition equation to its visual equivalent.

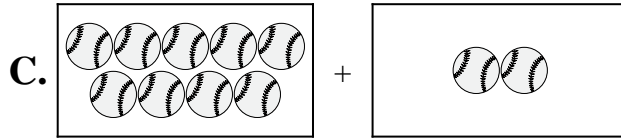
1) $9 + 2$



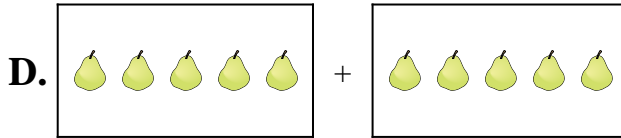
2) $2 + 6$



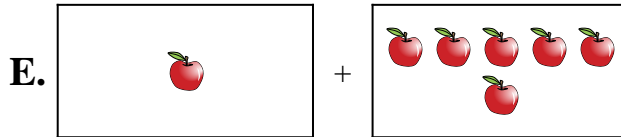
3) $1 + 2$



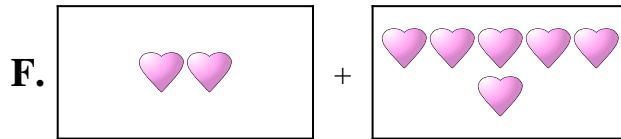
4) $1 + 6$




5) $3 + 4$




6) $10 + 10$



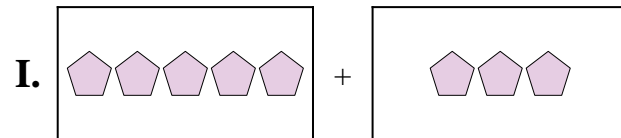
7) $5 + 3$



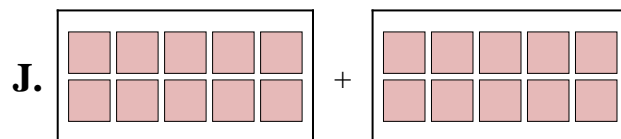
8) $7 + 10$



9) $2 + 2$



10) $5 + 5$



Answers

1. **C**

2. **F**

3. **A**

4. **E**

5. **H**

6. **J**

7. **I**

8. **G**

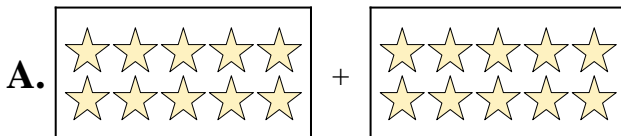
9. **B**

10. **D**

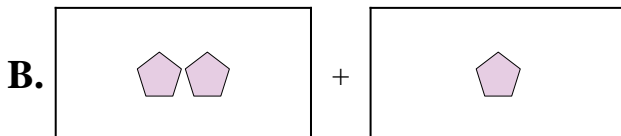


Match each addition equation to its visual equivalent.

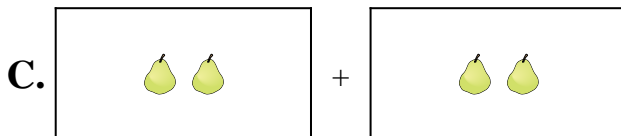
1) $10 + 7$



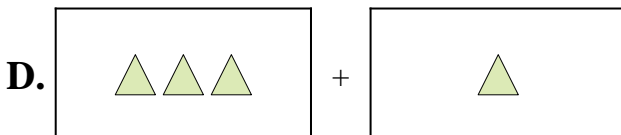
2) $9 + 9$



3) $7 + 6$



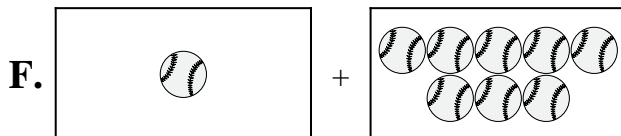
4) $1 + 8$



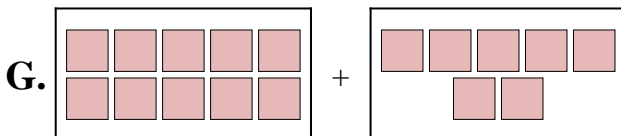
5) $10 + 10$



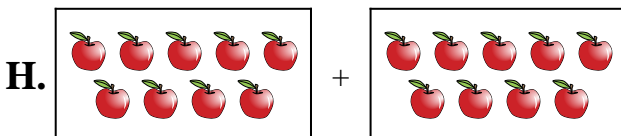
6) $2 + 3$




7) $10 + 9$



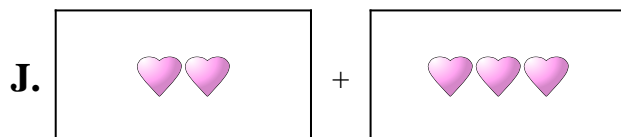
8) $2 + 2$



9) $3 + 1$



10) $2 + 1$



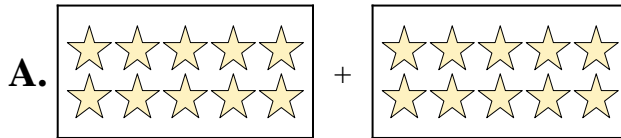
Answers

1. _____
2. _____
3. _____
4. _____
5. _____
6. _____
7. _____
8. _____
9. _____
10. _____

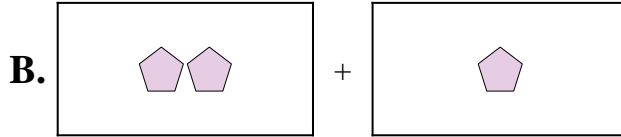


Match each addition equation to its visual equivalent.

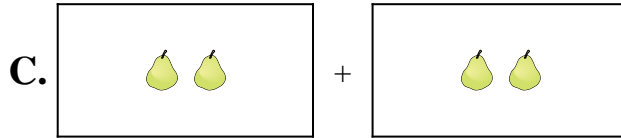
1) $10 + 7$



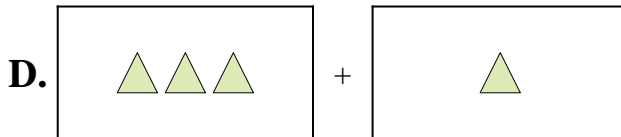
2) $9 + 9$




3) $7 + 6$



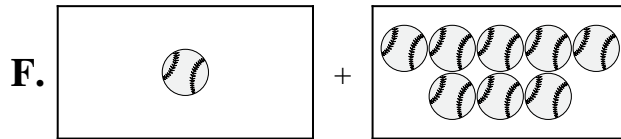
4) $1 + 8$



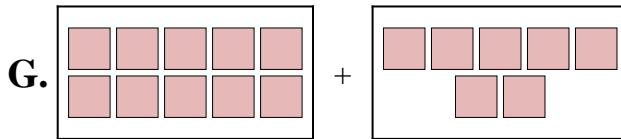
5) $10 + 10$



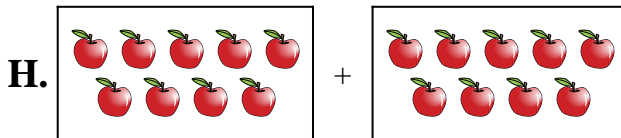
6) $2 + 3$




7) $10 + 9$



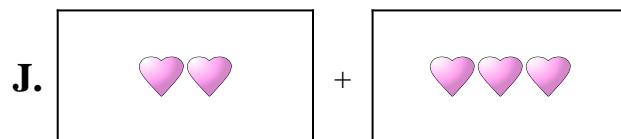
8) $2 + 2$



9) $3 + 1$



10) $2 + 1$



Answers

1. **G**

2. **H**

3. **E**

4. **F**

5. **A**

6. **J**

7. **I**

8. **C**

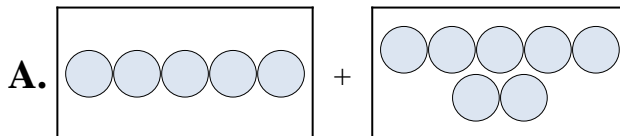
9. **D**

10. **B**

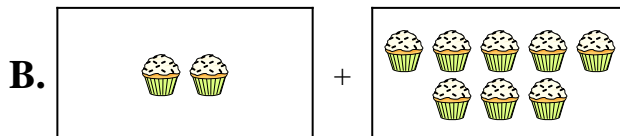


Match each addition equation to its visual equivalent.

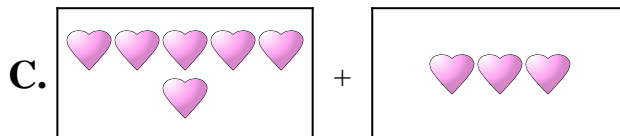
1) $8 + 6$



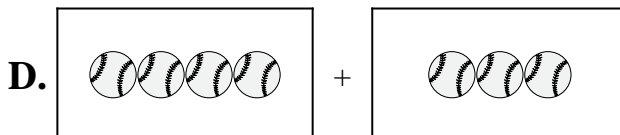
2) $4 + 1$



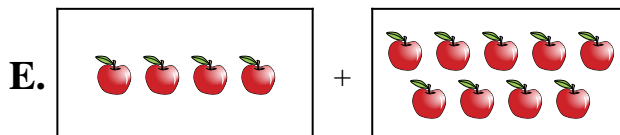
3) $6 + 3$



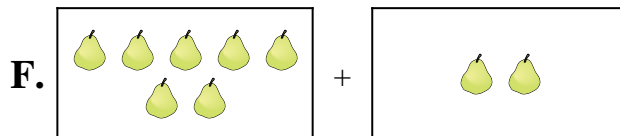
4) $5 + 7$




5) $6 + 1$



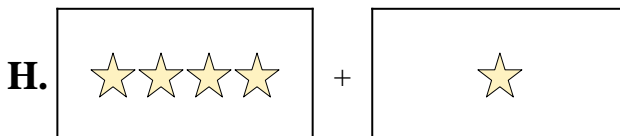
6) $1 + 3$



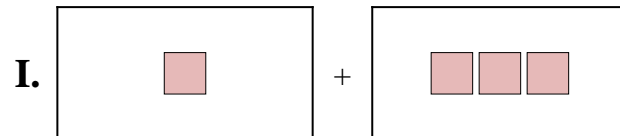
7) $4 + 3$



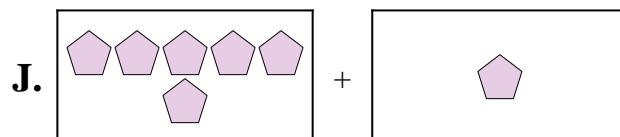
8) $7 + 2$



9) $2 + 8$



10) $4 + 9$



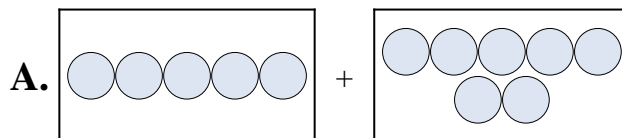
Answers

1. _____
2. _____
3. _____
4. _____
5. _____
6. _____
7. _____
8. _____
9. _____
10. _____

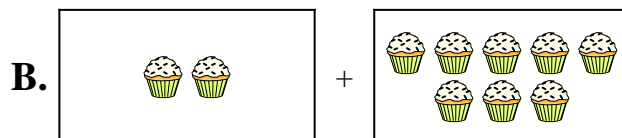


Match each addition equation to its visual equivalent.

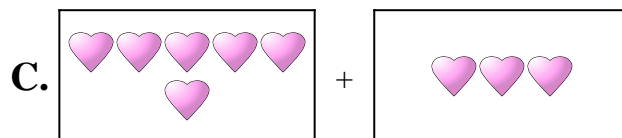
1) $8 + 6$



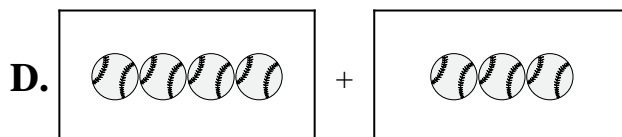
2) $4 + 1$



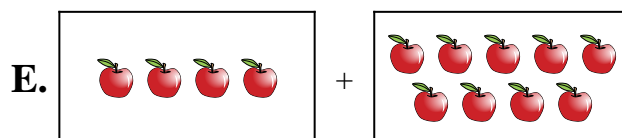
3) $6 + 3$



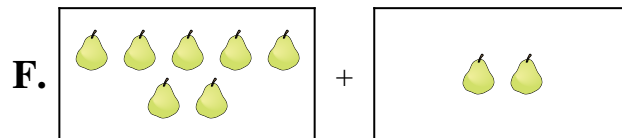
4) $5 + 7$




5) $6 + 1$



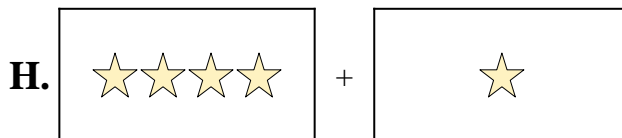
6) $1 + 3$



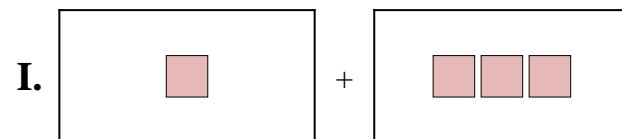
7) $4 + 3$



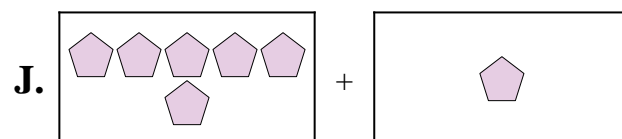
8) $7 + 2$



9) $2 + 8$



10) $4 + 9$



Answers

1. **G**

2. **H**

3. **C**

4. **A**

5. **J**

6. **I**

7. **D**

8. **F**

9. **B**

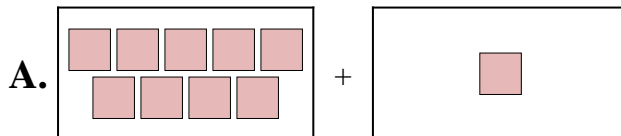
10. **E**



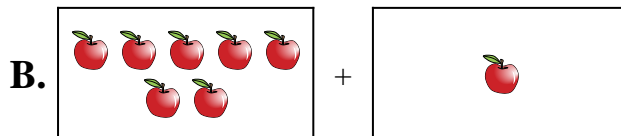
Match each addition equation to its visual equivalent.

Answers

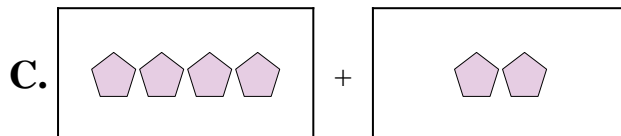
1) $4 + 10$



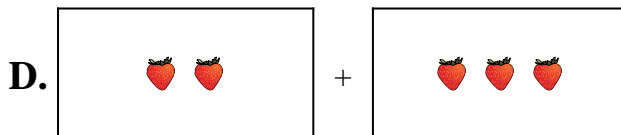
2) $3 + 8$



3) $4 + 2$



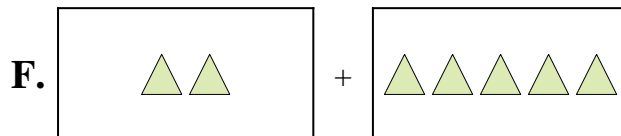
4) $7 + 1$



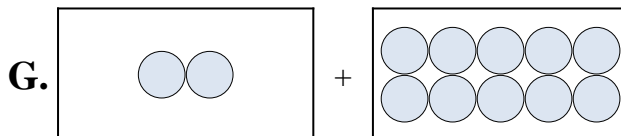
5) $2 + 5$




6) $2 + 10$



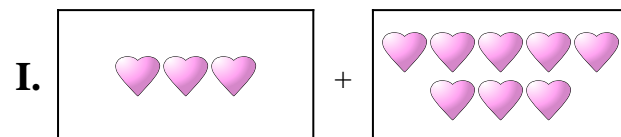
7) $5 + 8$



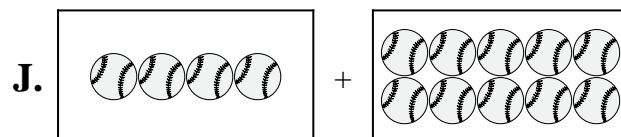
8) $2 + 3$



9) $9 + 7$



10) $9 + 1$

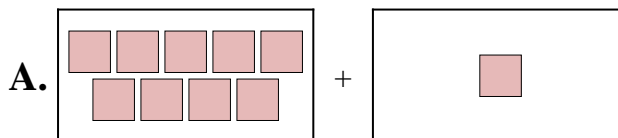


1. _____
2. _____
3. _____
4. _____
5. _____
6. _____
7. _____
8. _____
9. _____
10. _____

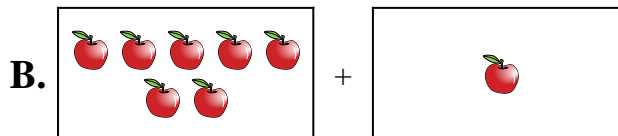


Match each addition equation to its visual equivalent.

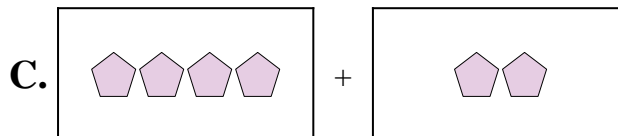
1) $4 + 10$



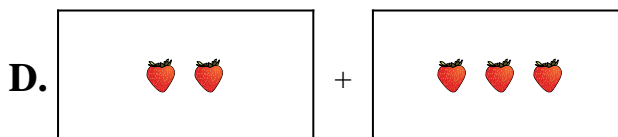
2) $3 + 8$



3) $4 + 2$



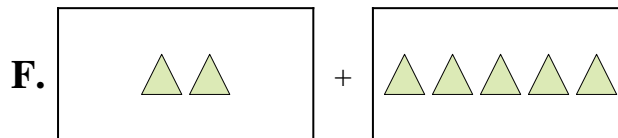
4) $7 + 1$



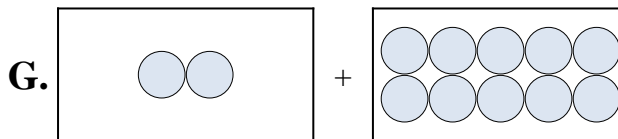
5) $2 + 5$




6) $2 + 10$



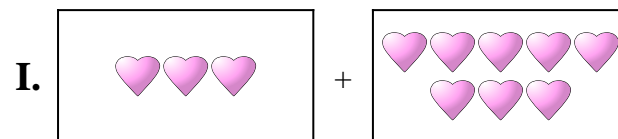
7) $5 + 8$



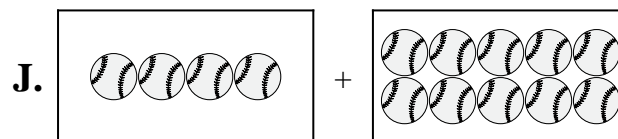
8) $2 + 3$



9) $9 + 7$



10) $9 + 1$



Answers

1. **J**

2. **I**

3. **C**

4. **B**

5. **F**

6. **G**

7. **E**

8. **D**

9. **H**


10. **A**



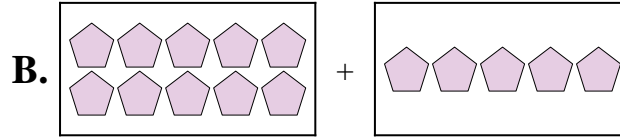
Match each addition equation to its visual equivalent.

Answers

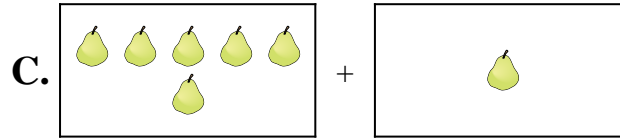
1) $8 + 8$




2) $5 + 1$



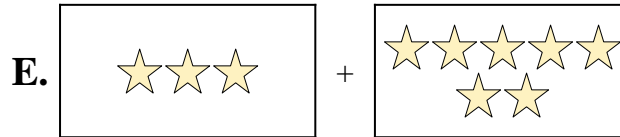
3) $6 + 1$



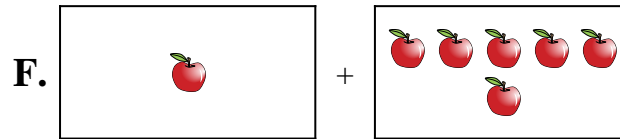
4) $3 + 7$



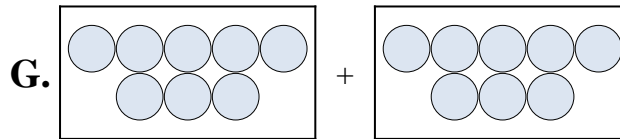
5) $5 + 9$



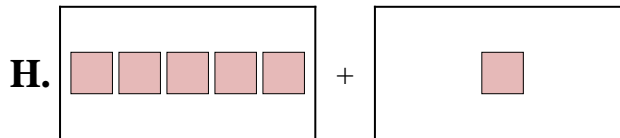
6) $1 + 6$



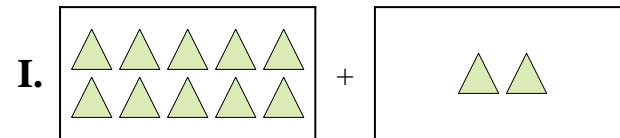
7) $10 + 2$



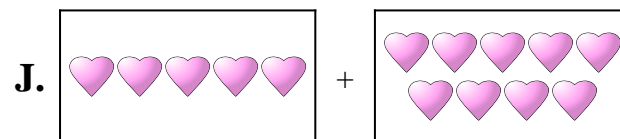
8) $9 + 5$



9) $10 + 5$



10) $7 + 9$




1. _____
2. _____
3. _____
4. _____
5. _____
6. _____
7. _____
8. _____
9. _____
10. _____

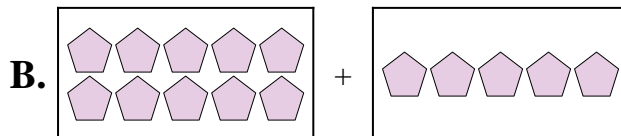


Match each addition equation to its visual equivalent.

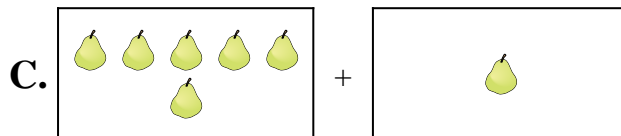
1) $8 + 8$




2) $5 + 1$



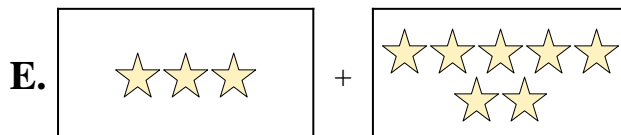
3) $6 + 1$



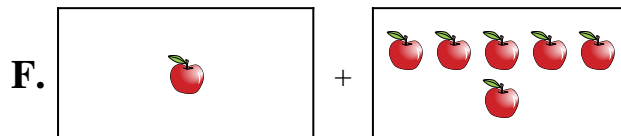
4) $3 + 7$



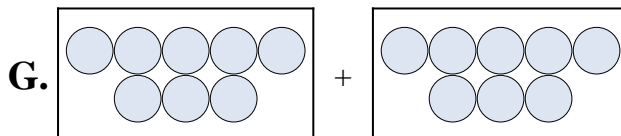
5) $5 + 9$



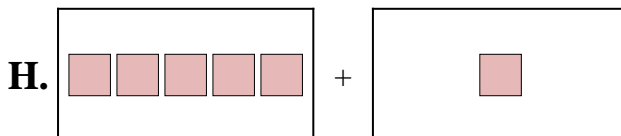
6) $1 + 6$



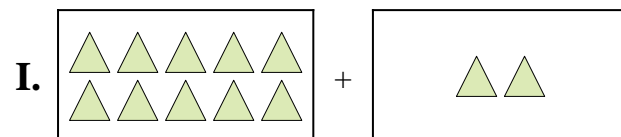
7) $10 + 2$



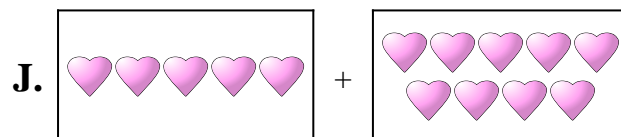
8) $9 + 5$



9) $10 + 5$



10) $7 + 9$



Answers

1. **G**

2. **H**

3. **C**

4. **E**

5. **J**

6. **F**

7. **I**

8. **D**

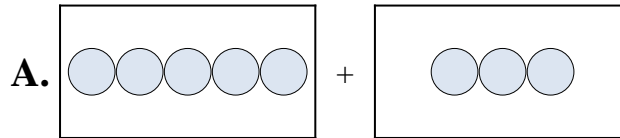
9. **B**

10. **A**

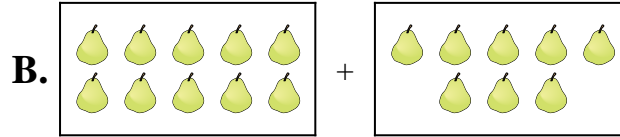


Match each addition equation to its visual equivalent.

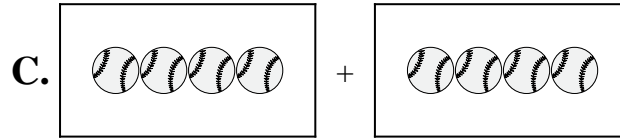
1) $4 + 4$



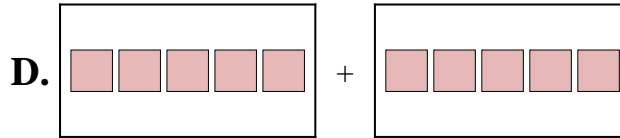
2) $6 + 6$



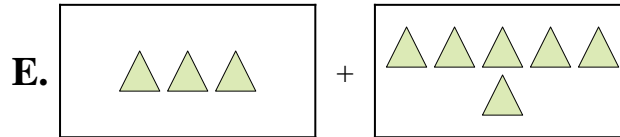
3) $3 + 5$



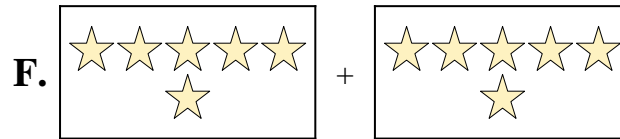
4) $3 + 6$



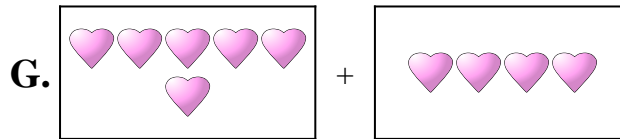
5) $4 + 3$



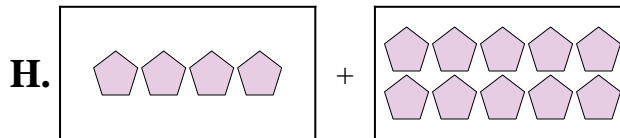
6) $5 + 3$




7) $5 + 5$



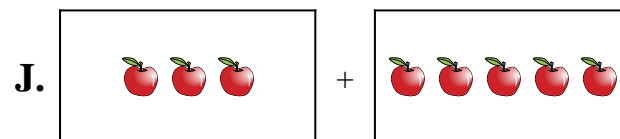
8) $4 + 10$



9) $6 + 4$



10) $10 + 8$



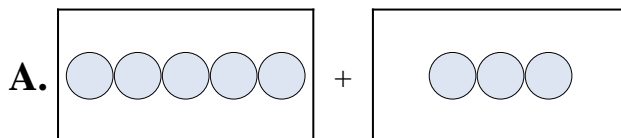
Answers

1. _____
2. _____
3. _____
4. _____
5. _____
6. _____
7. _____
8. _____
9. _____
10. _____

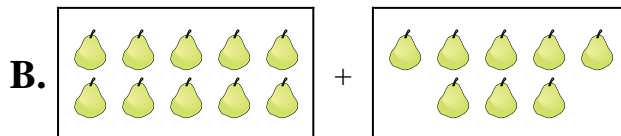


Match each addition equation to its visual equivalent.

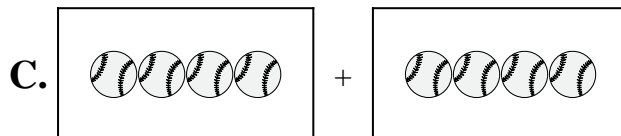
1) $4 + 4$



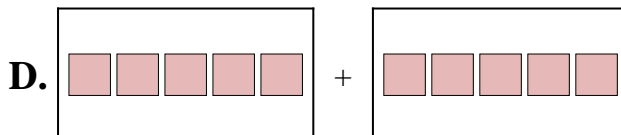
2) $6 + 6$



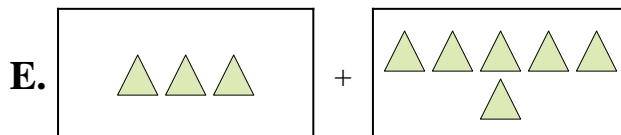
3) $3 + 5$



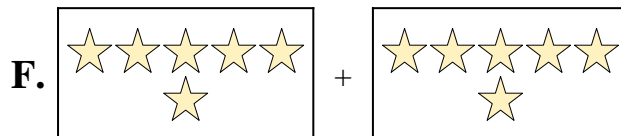
4) $3 + 6$



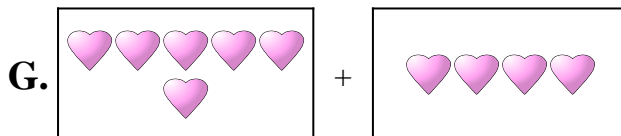
5) $4 + 3$



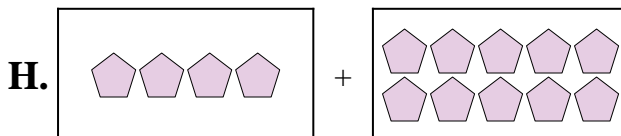
6) $5 + 3$




7) $5 + 5$



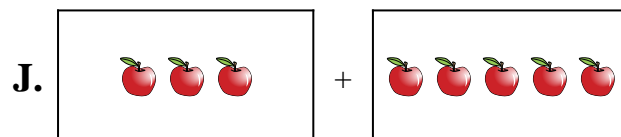
8) $4 + 10$



9) $6 + 4$



10) $10 + 8$



Answers

1. **C**

2. **F**

3. **J**

4. **E**

5. **I**

6. **A**

7. **D**

8. **H**

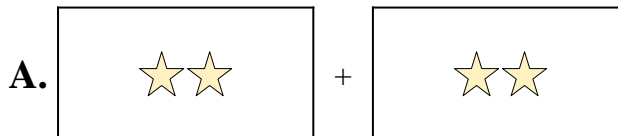
9. **G**

10. **B**




Match each addition equation to its visual equivalent.

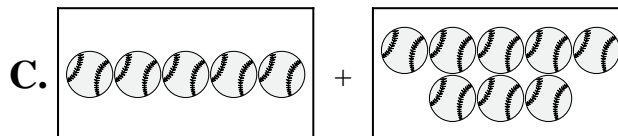
1) $9 + 5$



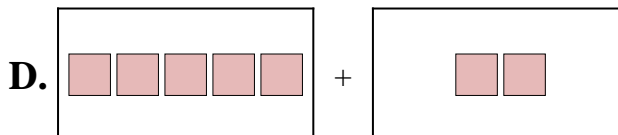
2) $9 + 10$



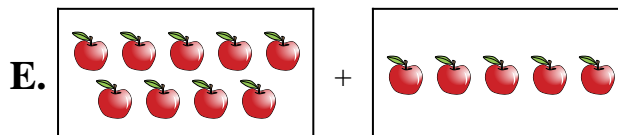
3) $5 + 2$




4) $10 + 2$



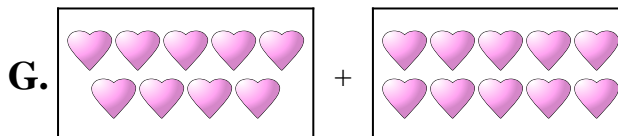
5) $1 + 10$



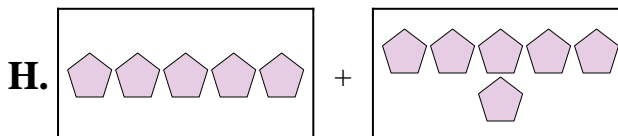
6) $2 + 2$



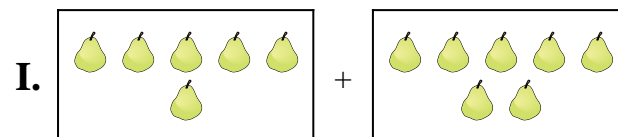
7) $8 + 8$



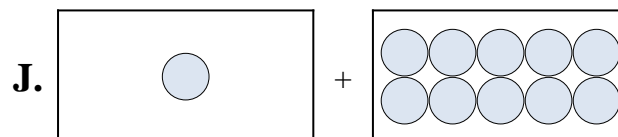
8) $6 + 7$



9) $5 + 8$



10) $5 + 6$



Answers

1. _____

2. _____

3. _____

4. _____

5. _____

6. _____

7. _____

8. _____

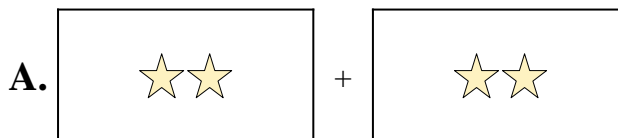
9. _____

10. _____




Match each addition equation to its visual equivalent.

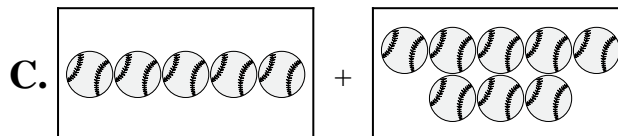
1) $9 + 5$



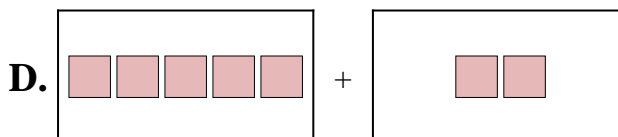
2) $9 + 10$



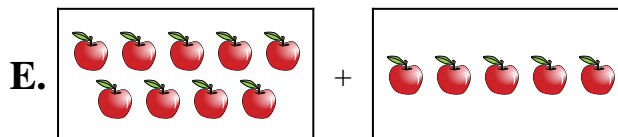
3) $5 + 2$




4) $10 + 2$



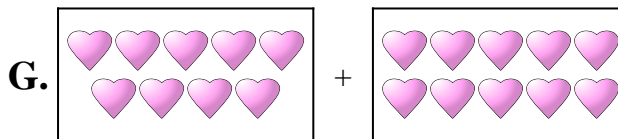
5) $1 + 10$



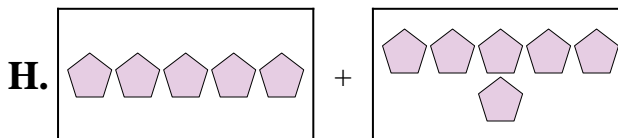
6) $2 + 2$



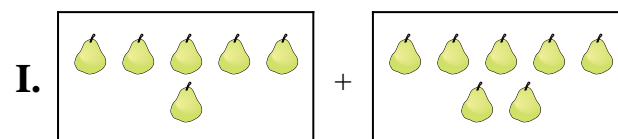
7) $8 + 8$



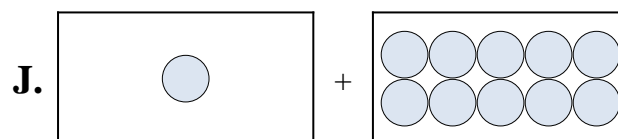
8) $6 + 7$



9) $5 + 8$



10) $5 + 6$



Answers

1. **E**

2. **G**

3. **D**

4. **B**

5. **J**

6. **A**

7. **F**

8. **I**

9. **C**

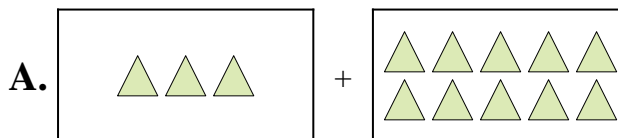
10. **H**



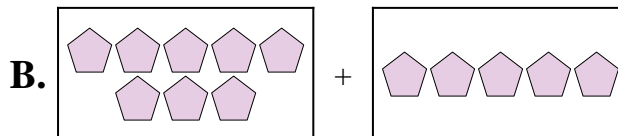
Match each addition equation to its visual equivalent.

Answers

1) $9 + 5$



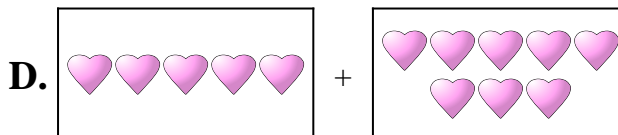
2) $8 + 5$



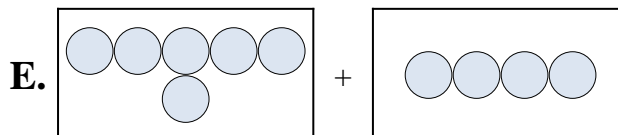
3) $10 + 1$




4) $1 + 1$



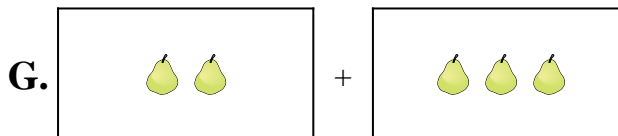
5) $3 + 9$



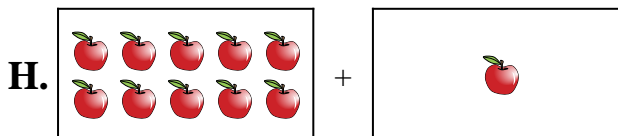
6) $7 + 1$



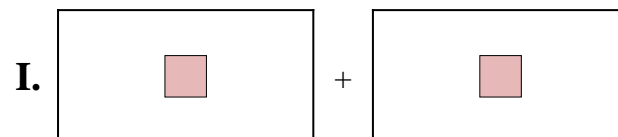
7) $2 + 3$



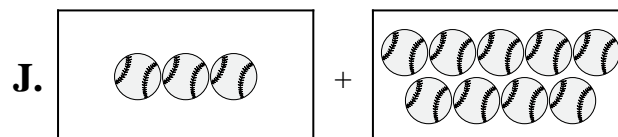
8) $5 + 8$



9) $6 + 4$



10) $3 + 10$

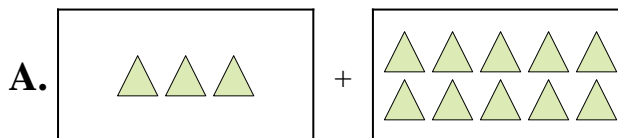


1. _____
2. _____
3. _____
4. _____
5. _____
6. _____
7. _____
8. _____
9. _____
10. _____

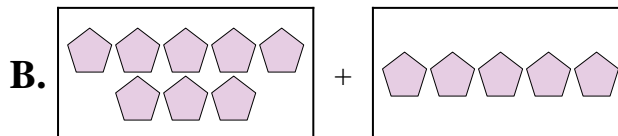


Match each addition equation to its visual equivalent.

1) $9 + 5$



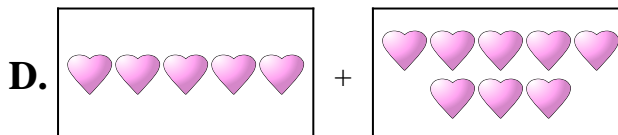
2) $8 + 5$



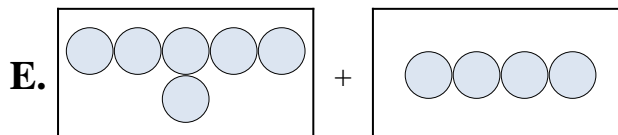
3) $10 + 1$




4) $1 + 1$



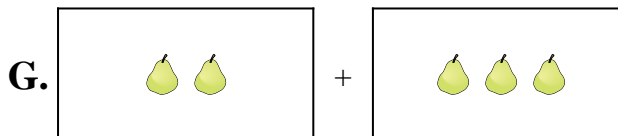
5) $3 + 9$



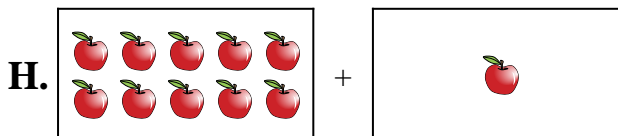
6) $7 + 1$



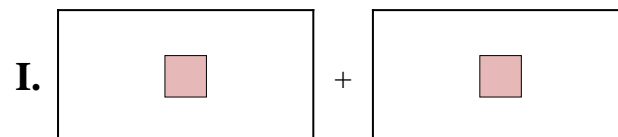
7) $2 + 3$



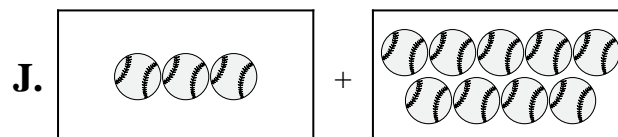
8) $5 + 8$



9) $6 + 4$



10) $3 + 10$



Answers

1. **F**

2. **B**

3. **H**

4. **I**

5. **J**

6. **C**

7. **G**

8. **D**

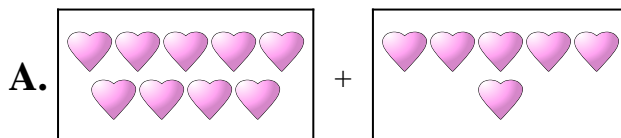
9. **E**

10. **A**

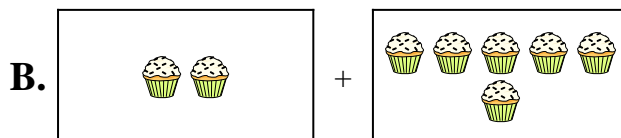


Match each addition equation to its visual equivalent.

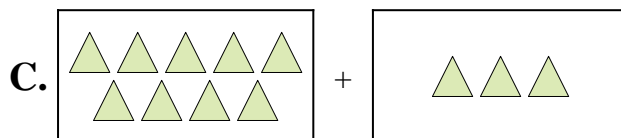
1) $8 + 5$



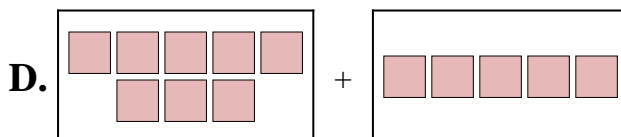
2) $4 + 8$



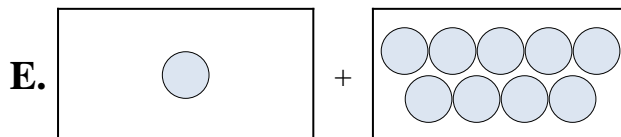
3) $9 + 6$



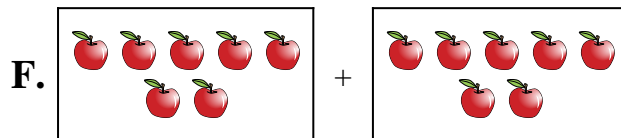
4) $6 + 10$



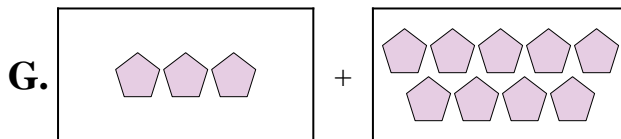
5) $7 + 7$



6) $1 + 9$



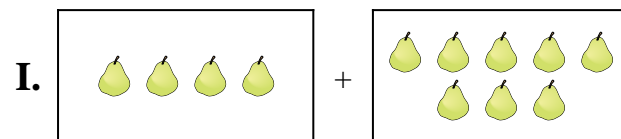
7) $2 + 6$



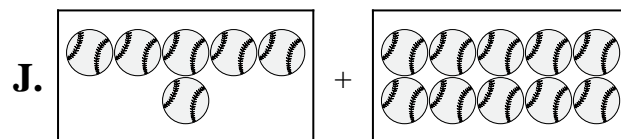
8) $6 + 9$



9) $9 + 3$



10) $3 + 9$



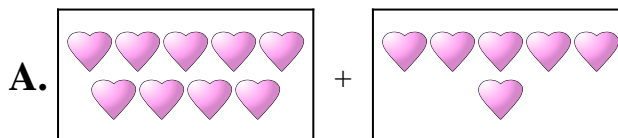
Answers

1. _____
2. _____
3. _____
4. _____
5. _____
6. _____
7. _____
8. _____
9. _____
10. _____

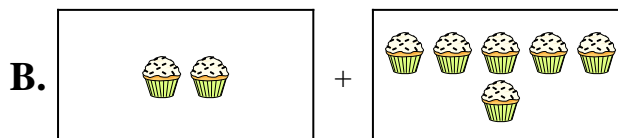


Match each addition equation to its visual equivalent.

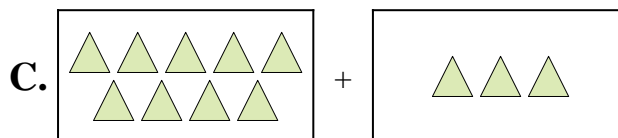
1) $8 + 5$



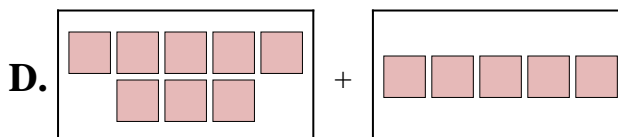
2) $4 + 8$



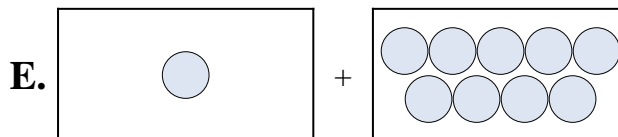
3) $9 + 6$



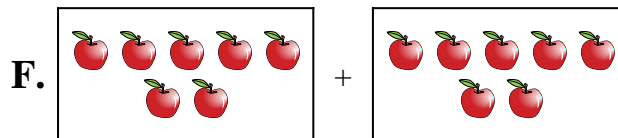
4) $6 + 10$



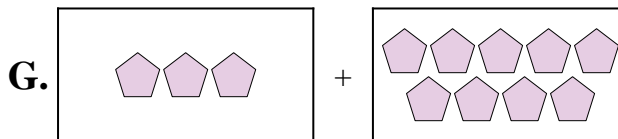
5) $7 + 7$



6) $1 + 9$



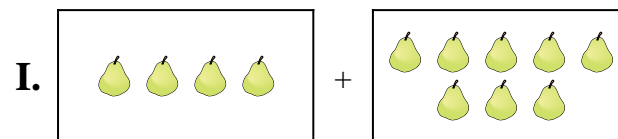
7) $2 + 6$



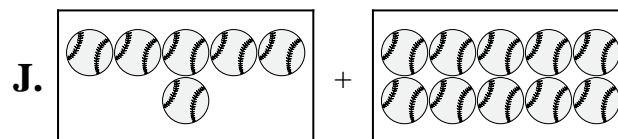
8) $6 + 9$



9) $9 + 3$



10) $3 + 9$



Answers

1. **D**

2. **I**

3. **A**

4. **J**

5. **F**

6. **E**

7. **B**

8. **H**


9. **C**

10. **G**

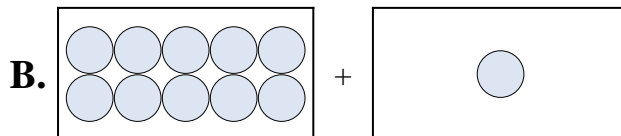


Match each addition equation to its visual equivalent.

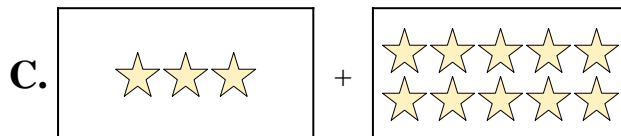
1) $6 + 3$



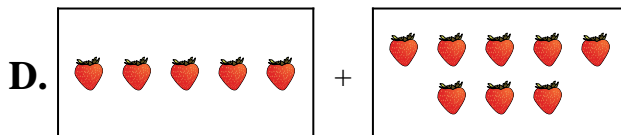
2) $3 + 10$



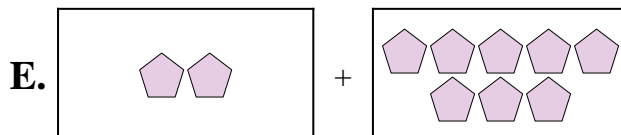
3) $4 + 5$



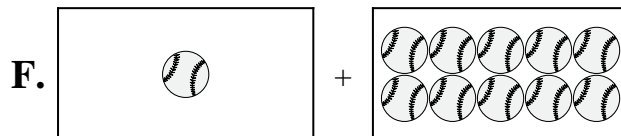
4) $2 + 8$



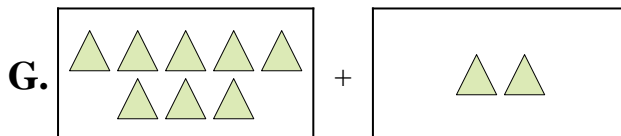
5) $8 + 2$



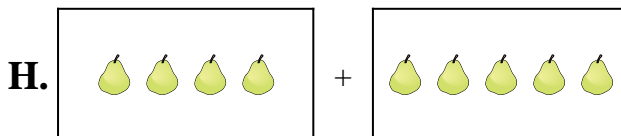
6) $5 + 8$



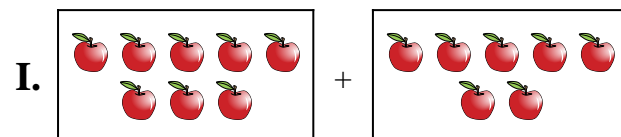
7) $8 + 7$



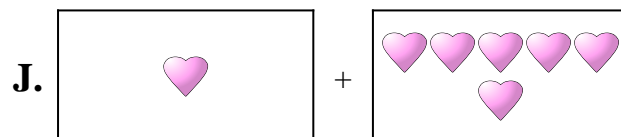
8) $10 + 1$



9) $1 + 6$



10) $1 + 10$



Answers

1. _____

2. _____

3. _____

4. _____

5. _____

6. _____

7. _____

8. _____


9. _____

10. _____

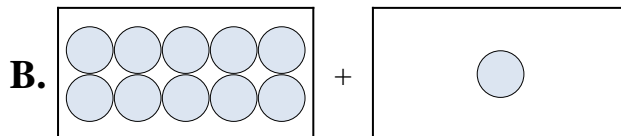


Match each addition equation to its visual equivalent.

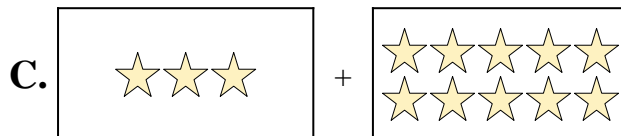
1) $6 + 3$



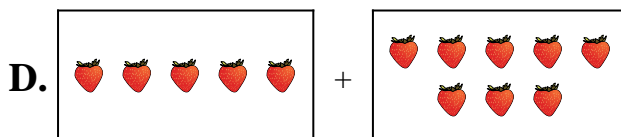
2) $3 + 10$



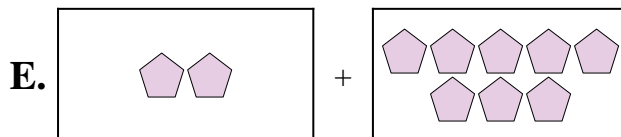
3) $4 + 5$



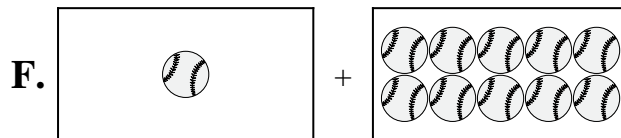
4) $2 + 8$



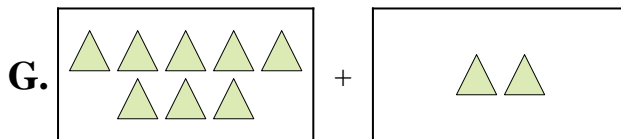
5) $8 + 2$



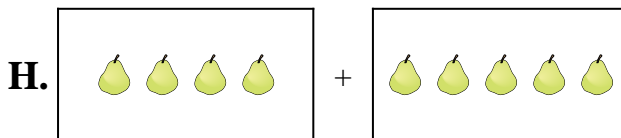
6) $5 + 8$



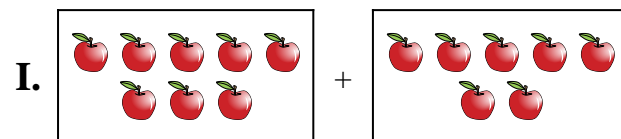
7) $8 + 7$



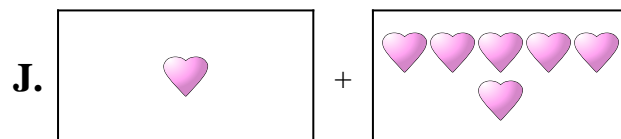
8) $10 + 1$



9) $1 + 6$



10) $1 + 10$



Answers

1. **A**

2. **C**

3. **H**

4. **E**

5. **G**

6. **D**

7. **I**

8. **B**

9. **J**

10. **F**